


Name: _____ Period: _____ Date: _____

Place Fractions on a Number Line


Assignment – Student Edition

Math 3

1. Label $\frac{2}{4}$ and $\frac{3}{4}$ on this number line; label the fractions at zero and 1.



2. Label $\frac{2}{5}$ and $\frac{4}{5}$ on this number line; label the fractions at zero and 1.



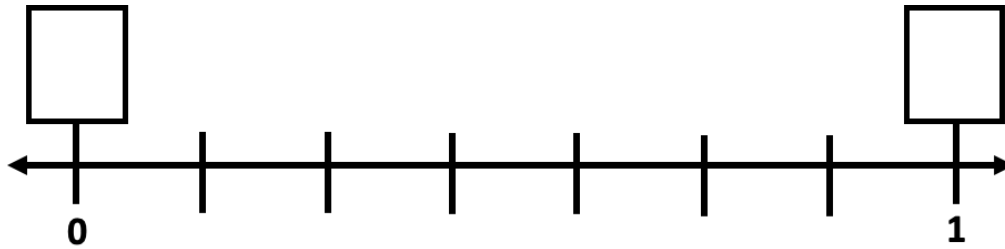
Name: _____ Period: _____ Date: _____

Place Fractions on a Number Line

Assignment – Student Edition

Math 3

3. Label the appropriate fractions on the number line below, make; sure you also label the fractions at zero and 1.



4. Draw a number line and label the following fractions on it 0, 2/10, 5/10, 6/10, 8/10, 10/10.