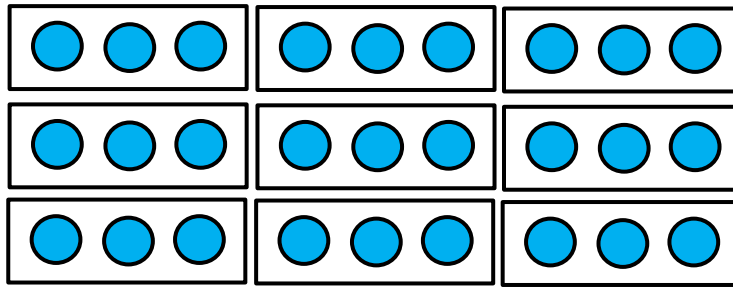



## Division: The Number of Groups Exit Quiz – Teacher Edition Math 3

Determine the number of groups and the size of each group:




1. Number of groups = 9  
Size of each group = 3  
 $27 \div \text{size of each group} = 9$

Separate the dots into a size of 4 to find the number of groups:



2.  $36 \div 4 = 9$

Separate the dots into a size of 6 to find the number of groups:



3.  $48 \div 6 = 8$

Determine the quotient of the following:

4. 64 into groups of size 8 = 8

5. 45 into groups of size 5 = 9