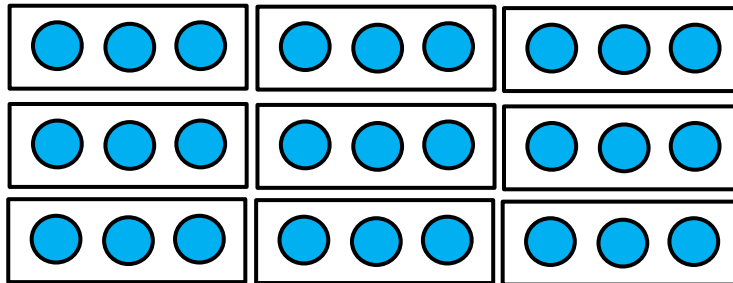


Division: The Number of Groups Exit Quiz


Math 3

Determine the number of groups and the size of each group:




- Number of groups = _____
 Size of each group = _____
 _____ ÷ size of each group = _____

Separate the dots into a size of 4 to find the number of groups:



- _____ ÷ 4 = _____

Separate the dots into a size of 6 to find the number of groups:



- _____ ÷ 6 = _____

Determine the quotient of the following:

4. 64 into groups of size 8 = _____

5. 45 into groups of size 5 = _____