



# Multiplication Using Array Model Exit Quiz – Teacher Edition **Math 3**

How many rows and columns are there in the array model?




1. Rows: **3** Columns: **8**

Make an expression for the given array models:



2. **5 x 5**



- 4 x 9**

**6 x 5**

Shade the rows and columns in the table to represent the expression.


Determine the products of the following:

4. 6 rows of 4 = **24**

5. 7 rows of 3 = **21**