

Name: _____ Period: _____ Date: _____


Multiplication as "Equal Groups of" Bell Work

Math 3

Part A:

Box of Goodies

Choose and encircle a certain number of candies. Draw them in the box below.




2

3

4

5




6

7

8

9



Part B:

Group the dots into the specified number:

1. Into 8



2. Into 2



3. Into 5



Part C:

On Repeat

Solve the following repeated addition statements.

1. Add 3 four times

2. Add 6 three times

3. Add 7 five times