



Classifying 2-Dimensional Shapes

Exit Quiz
Math 5


TRUE or **FALSE**

Color the  **RED** if the statement is **TRUE**, and **BLUE** if the statement is **FALSE**.


1. An equiangular triangle can have one obtuse angle.




2. A triangle can have at least 2 acute angles.



3. An equilateral triangle is also equiangular.



4. A trapezoid has one pair of opposite sides that are parallel.



5. A scalene trapezoid can have right angles.

