


Ratios Bell Work

Part A: Complete the following statements.


1. _____ is the comparison between, or a relationship of two things.
2. The greatest common factor of the numbers in a ratio, reduced in lowest term, is _____.

Part B: Answer the following.

1. What is the ratio of circles to triangles?



2. What is the ratio of squares to hearts?



3. What is the ratio of suns to stars?



Ratios Bell Work


Answers:

Part A: Complete the following statements.

1. **Ratio** is the comparison between, or a relationship of two things.
2. The greatest common factor of the numbers in a ratio, reduced in lowest term, is **1**.


Part B: Answer the following.

3. What is the ratio of circles to triangles?



Solution: 8:6

4. What is the ratio of squares to hearts?



Solution: 8:7

5. What is the ratio of suns to stars?



Solution: 4:9