


**Writing and Interpreting Numerical Expressions** Bell Work


Math 5

Determine whether each of the following is a numerical expression or not. Color the star **ORANGE**, if it is a numerical expression, and **BLUE** if not.


1.  $5 - 4 = 8 - 7$




2.  $(9 + 3) \div 2$




3.  $(x + 4) - 6$



4.  $(10 \div 2) + (4 \times 3)$



5.  $10 \div (5 - 3) + (6 \times 2)$



Name: \_\_\_\_\_ Period: \_\_\_\_\_ Date: \_\_\_\_\_

# Writing and Interpreting Numerical Expressions Bell Work

**Math 5**